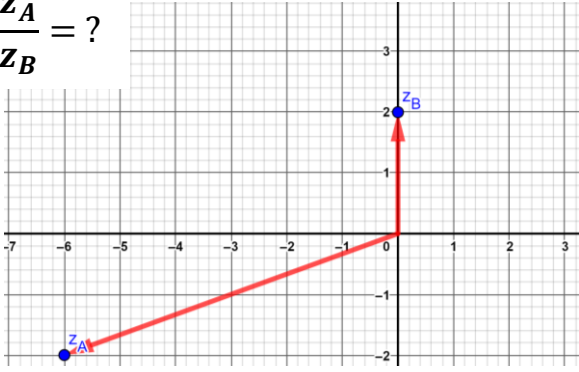


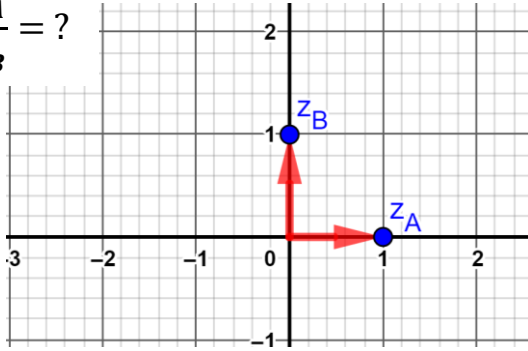
$$\frac{z_A}{z_B} = ?$$



$z_A =$

$z_B =$

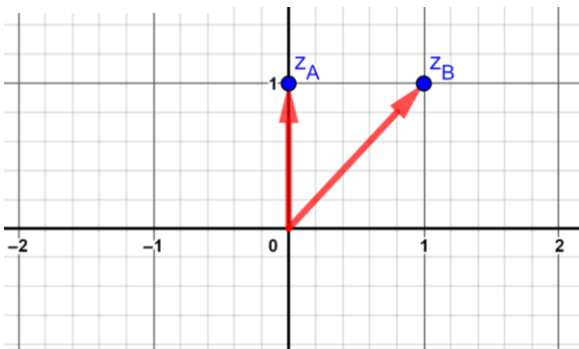
$$\frac{z_A}{z_B} = ?$$



$z_A =$

$z_B =$

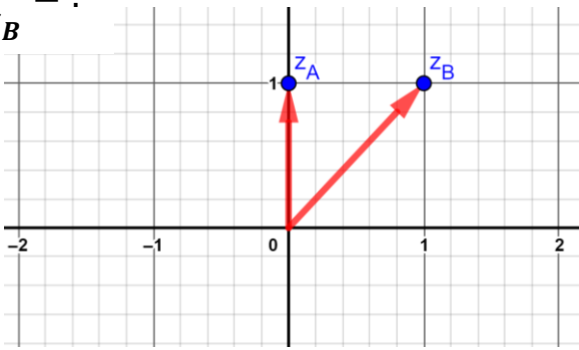
$$z_A \times z_B = ?$$



$z_A =$

$z_B =$

$$\frac{z_A}{z_B} = ?$$



$z_A =$

$z_B =$